

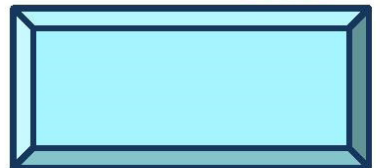
VOYAGER JUNIOR ACTIVITY BOOK



24

ACTIVITIES!

How many cupcakes can you find





Greater than and less than symbols
are used to compare numbers.
The smaller pointy side always is
pointing to the smaller number.

The GREATER THAN symbol is $>$

The LESS THAN symbol is $<$

$$13 < 19$$

$$3 \square 7$$

$$17 \square 23$$

$$19 \square 23$$

$$6 \square 3$$

$$14 \square 11$$


$$20 \square 22$$

$$6 \square 15$$

$$5 \square 3$$

$$12 \square 9$$

Count the sides of the shapes
and use the key to color them in



Sides	
3	- BLUE
4	- RED
5	- GREEN
6	- YELLOW



Addition
is fun and easy.
Sharpen your
math skills!

Math Addition #1

$$\begin{array}{r} 2 \\ +3 \\ \hline \end{array}$$

$$\begin{array}{r} 4 \\ +5 \\ \hline \end{array}$$

$$\begin{array}{r} 3 \\ +6 \\ \hline \end{array}$$

$$\begin{array}{r} 5 \\ +1 \\ \hline \end{array}$$

$$\begin{array}{r} 3 \\ +5 \\ \hline \end{array}$$

$$\begin{array}{r} 4 \\ +2 \\ \hline \end{array}$$

$$\begin{array}{r} 2 \\ +7 \\ \hline \end{array}$$

$$\begin{array}{r} 5 \\ +2 \\ \hline \end{array}$$

$$\begin{array}{r} 6 \\ +2 \\ \hline \end{array}$$

$$\begin{array}{r} 5 \\ +3 \\ \hline \end{array}$$

$$\begin{array}{r} 6 \\ +1 \\ \hline \end{array}$$

$$\begin{array}{r} 7 \\ +2 \\ \hline \end{array}$$

$$\begin{array}{r} 3 \\ +5 \\ \hline \end{array}$$

$$\begin{array}{r} 4 \\ +3 \\ \hline \end{array}$$

$$\begin{array}{r} 5 \\ +2 \\ \hline \end{array}$$

$$\begin{array}{r} 6 \\ +3 \\ \hline \end{array}$$

$$\begin{array}{r} 8 \\ +1 \\ \hline \end{array}$$

$$\begin{array}{r} 4 \\ +4 \\ \hline \end{array}$$

$$\begin{array}{r} 1 \\ +6 \\ \hline \end{array}$$

$$\begin{array}{r} 5 \\ +3 \\ \hline \end{array}$$

Match the rhyming words

CAT

TAP

BELL

LIP

TOP

ROD

HUT

MAP

ZIP


MOP

MAT

NUT

POD

WELL



Math is very important
and you will use it
your whole life.
Have fun with it!



Math Addition # 2

$$\begin{array}{r} 3 \\ +5 \\ \hline \end{array}$$

$$\begin{array}{r} 2 \\ +7 \\ \hline \end{array}$$

$$\begin{array}{r} 5 \\ +1 \\ \hline \end{array}$$

$$\begin{array}{r} 4 \\ +5 \\ \hline \end{array}$$

$$\begin{array}{r} 2 \\ +6 \\ \hline \end{array}$$

$$\begin{array}{r} 4 \\ +2 \\ \hline \end{array}$$

$$\begin{array}{r} 1 \\ +7 \\ \hline \end{array}$$

$$\begin{array}{r} 2 \\ +2 \\ \hline \end{array}$$

$$\begin{array}{r} 3 \\ +4 \\ \hline \end{array}$$

$$\begin{array}{r} 2 \\ +1 \\ \hline \end{array}$$

$$\begin{array}{r} 7 \\ +2 \\ \hline \end{array}$$

$$\begin{array}{r} 3 \\ +1 \\ \hline \end{array}$$

$$\begin{array}{r} 6 \\ +2 \\ \hline \end{array}$$

$$\begin{array}{r} 5 \\ +4 \\ \hline \end{array}$$

$$\begin{array}{r} 5 \\ +2 \\ \hline \end{array}$$

$$\begin{array}{r} 1 \\ +3 \\ \hline \end{array}$$

$$\begin{array}{r} 4 \\ +3 \\ \hline \end{array}$$

$$\begin{array}{r} 6 \\ +3 \\ \hline \end{array}$$

$$\begin{array}{r} 3 \\ +3 \\ \hline \end{array}$$

$$\begin{array}{r} 3 \\ +2 \\ \hline \end{array}$$



Math is useful for science and inventing things!

Math Puzzle #1

8	+	8	+	10	=	
+		+		+		+
4	+	3	+	9	=	
+		+		+		+
10	+	6	+	4	=	
=		=		=		=
	+		+		=	

Prof. Cleanfields love sustainable science, technologies and clean sources of energy.

There are many things
to count around your house.
Count how many walls
you have in your home!



Math Addition # 3

$$\begin{array}{r} 32 \\ +63 \\ \hline \end{array}$$

$$\begin{array}{r} 14 \\ +45 \\ \hline \end{array}$$

$$\begin{array}{r} 23 \\ +46 \\ \hline \end{array}$$

$$\begin{array}{r} 25 \\ +51 \\ \hline \end{array}$$

$$\begin{array}{r} 23 \\ +35 \\ \hline \end{array}$$

$$\begin{array}{r} 64 \\ +32 \\ \hline \end{array}$$

$$\begin{array}{r} 52 \\ +17 \\ \hline \end{array}$$

$$\begin{array}{r} 15 \\ +52 \\ \hline \end{array}$$

$$\begin{array}{r} 16 \\ +72 \\ \hline \end{array}$$

$$\begin{array}{r} 75 \\ +13 \\ \hline \end{array}$$

$$\begin{array}{r} 16 \\ +61 \\ \hline \end{array}$$

$$\begin{array}{r} 37 \\ +32 \\ \hline \end{array}$$

$$\begin{array}{r} 63 \\ +25 \\ \hline \end{array}$$

$$\begin{array}{r} 44 \\ +43 \\ \hline \end{array}$$

$$\begin{array}{r} 75 \\ +22 \\ \hline \end{array}$$

$$\begin{array}{r} 16 \\ +13 \\ \hline \end{array}$$

$$\begin{array}{r} 48 \\ +21 \\ \hline \end{array}$$

$$\begin{array}{r} 44 \\ +54 \\ \hline \end{array}$$

$$\begin{array}{r} 71 \\ +26 \\ \hline \end{array}$$

$$\begin{array}{r} 35 \\ +53 \\ \hline \end{array}$$



Do you remember
which symbol is
GREATER THAN or
LESS THAN?

45

42

38

35

7

9

42

41

13

12

46

49

21

24

52

54


33

32

63

65

How many roses do you see?



Subtraction uses a
minus sign

-



Math Subtraction # 1

15

-8

14

-6

14

-7

15

-7

17

-8

11

-2

12

-7

16

-7

13

-7

14

-6

18

-9

11

-9

15

-8

17

-9

15

-6

11

-6

14

-8

14

-5

11

-5

13

-4




Math helps with creative art projects!

Math Puzzle # 2

10	+	5	+	4	=	
+		+		+		+
10	+	5	+	7	=	
+		+		+		+
4	+	2	+	10	=	
=		=		=		=
	+		+		=	


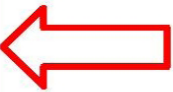
Giorgios uses math in all his art projects!
What is your favorite art project to work on?

Count and write the number of left and right arrows



Total right arrows

Total left arrows

	<input data-bbox="244 1401 512 1528" type="text"/>		<input data-bbox="787 1401 1056 1528" type="text"/>
--	--	---	---

Math helps with astronomy and looking at the stars!



Math Puzzle # 3

6	+	4	+	10	=	
+		+		+		+
8	+	6	+	2	=	
+		+		+		+
5	+	5	+	2	=	
=		=		=		=
	+		+		=	

Jeza loves looking at the sky and knows a lot about our ancient history!

Find and circle the names of the shapes

O C I R C L E L P S
T D B S Q U A R E T
R I I A N G L E K A
I A M G Q R Z S E R
A M V Z S T A R K Q
N O T O V A L S Q Z
G N H E A R T Q C C
L D M Q R F H L R O
E C U B E I L O U N
R E C T A N G L E E

1. CIRCLE

2. SQUARE

3. TRIANGLE

4. RECTANGLE

5. CONE

6. STAR

7. HEART

8. OVAL

9. DIAMOND

10. CUBE



There are numbers found
in nature that ancient
scholars knew about!
Find out for yourself!

Math Puzzle # 4

2	+	6	+	10	=	
+		+		+		+
2	+	5	+	5	=	
+		+		+		+
6	+	6	+	8	=	
=		=		=		=
	+		+		=	

Frieburd loves hanging out in Nature!
What is your favorite place to visit?
The beach? The forest? A mountain?

Read and write the correct name of the seasons



WINTER
SUMMER

AUTUMN
SPRING






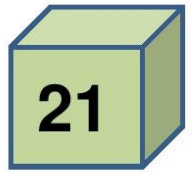
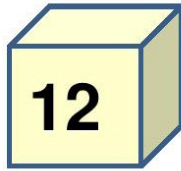




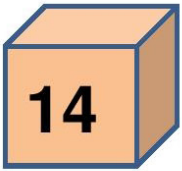

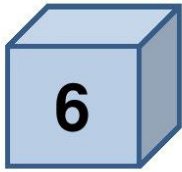


Have you heard about sound healing? It uses numbers to help many people around the world!

Math Puzzle #5

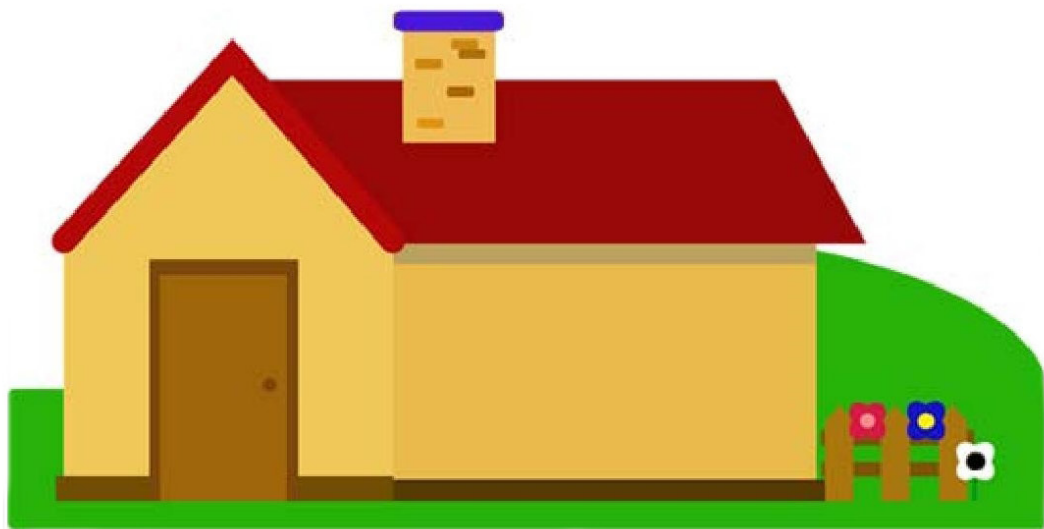
2	+	3	+	9	=	
+		+		+		+
4	+	1	+	2	=	
+		+		+		+
9	+	10	+	9	=	
=		=		=		=
	+		+		=	

Gibby is an expert helping people to heal naturally! What makes you feel better when you are sick?

Make a line and connect only the multiples of 3



Spot 6 differences in the pictures



Match the opposites



hot



bad



big



cold



good



sad





happy



small

Use the grid to copy the penguin



Find the following words in the pumpkin.



Apple
Banana
Pear
Orange
Grapes
Mango

F	B	A	N	A	N	A
G	A	P	Z	X	M	P
O	Q	E	G	B	A	P
L	W	A	R	J	N	L
K	O	R	A	N	G	E
A	Y	K	P	I	O	S
A	U	T	E	R	I	U
A	T	Y	S	Q	F	L



Draw something
about Nature!

HAPPINESS IS THE NEW RICH.

PEACE IS THE NEW SUCCESS.

KINDNESS IS THE NEW COOL.

This book belongs to



PHOENIX VOYAGE
Inspiring Solutions For a Better World
WWW.PHOENIXVOYAGE.ORG